




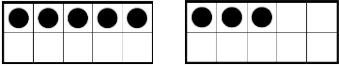
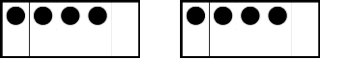
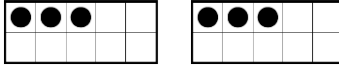

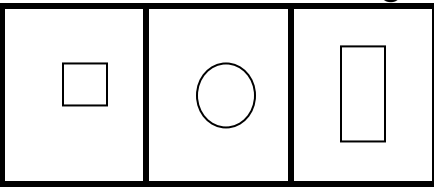
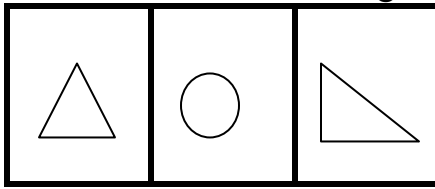



Name: _____

Date: _____

CCSS Domain	MONDAY	TUESDAY	WEDNESDAY	THURSDAY
Number and Operations Base Ten – 1.NBT	Circle number 5. 	What number comes before 5? 	What number comes after 5? 	Circle a number that is more than 5. 
Operations and Algebraic Thinking 1.OA	 $2 + 2 = \underline{\quad}$ Fill in the blank.	 $5 + 3 = \underline{\quad}$ Fill in the blank.	 $4 + 4 = \underline{\quad}$ Fill in the blank.	 $3 + 3 = \underline{\quad}$ Fill in the blank.
Measurement and Data 1.MD	What month is your birthday? How many people in your class were born in the same month?	In what year were you born? How many people in your class were born in the same year?	What is this? 	What does a clock show?
Geometry 1.G	Draw a circle.	Draw a rectangle.	Which one doesn't belong? 	Which one doesn't belong? 
Operations and Algebraic Thinking 1.OA	Fill in the Blank $2 + 2 = 2 + \underline{\quad}$	Finish the pattern 15, 20, 25, $\underline{\quad}$	Finish the pattern 20, 30, 40, $\underline{\quad}$	Finish the pattern 

Hundreds Chart – 1st Grade Homework

Number and
Operations Base Ten
- 1.NBT

Monday - Circle number 10. Circle all the numbers that count by 10s.

Tuesday – Circle the number 5. What number is before 5?

Wednesday – Circle the number 15. What number is after 15?

Thursday – Circle the number 25. What number is 2 more than 25?

1	2	3	4	5	6	7	8	9	10
11	12	13	14	15	16	17	18	19	20
21	22	23	24	25	26	27	28	29	30
31	32	33	34	35	36	37	38	39	40
41	42	43	44	45	46	47	48	49	50
51	52	53	54	55	56	57	58	59	60
61	62	63	64	65	66	67	68	69	70
71	72	73	74	75	76	77	78	79	80
81	82	83	84	85	86	87	88	89	90
91	92	93	94	95	96	97	98	99	100

