



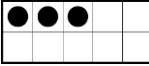

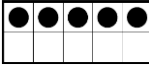
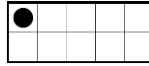


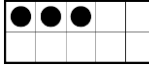
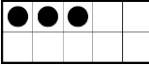

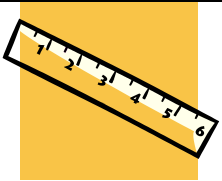




Name: _____

Date: _____

| CCSS Domain | MONDAY | TUESDAY | WEDNESDAY | THURSDAY |
|--|--|---|--|--|
| Operations and Algebraic Thinking 1.OA | How Many bears in all?  | There are 4 bears. Write a number sentence that makes 4. ____ + ____ = 4  | There are 6 bears. Write a number sentence that makes 6. ____ + ____ = 6  | How many more small bears than big bears?  |
| Operations and Algebraic Thinking 1.OA |   $3 + 2 = \underline{\quad}$ Fill in the blank. |   $5 + 1 = \underline{\quad}$ Fill in the blank. |   $4 + 2 = \underline{\quad}$ Fill in the blank. |   $3 + 3 = \underline{\quad}$ Fill in the blank. |
| Measurement and Data 1.MD |  What is this? | What does a clock show? |  What is this? | What does a ruler show? |
| Geometry 1.G | Name that Shape.  | Draw a square. | Name that Shape.  | Draw a triangle. |
| Operations and Algebraic Thinking 1.OA | Fill in the Blank $1 + 2 = 2 + \underline{\quad}$ | Finish the pattern 5, 10, 15, _____ | Finish the pattern 10, 20, 30, _____ | Fill in the Blank $3 + 2 = 2 + \underline{\quad}$ |

Hundreds Chart – 1st Grade Homework

Number and
Operations Base Ten
- 1.NBT

Monday - Circle number 10. Circle all the numbers that count by 10s.

Tuesday – Circle the number 5. What number is before 5?

Wednesday – Circle the number 15. What number is after 15?

Thursday – Circle the number 25. What number is 2 more than 25?

| | | | | | | | | | |
|----|----|----|----|----|----|----|----|----|-----|
| 1 | 2 | 3 | 4 | 5 | 6 | 7 | 8 | 9 | 10 |
| 11 | 12 | 13 | 14 | 15 | 16 | 17 | 18 | 19 | 20 |
| 21 | 22 | 23 | 24 | 25 | 26 | 27 | 28 | 29 | 30 |
| 31 | 32 | 33 | 34 | 35 | 36 | 37 | 38 | 39 | 40 |
| 41 | 42 | 43 | 44 | 45 | 46 | 47 | 48 | 49 | 50 |
| 51 | 52 | 53 | 54 | 55 | 56 | 57 | 58 | 59 | 60 |
| 61 | 62 | 63 | 64 | 65 | 66 | 67 | 68 | 69 | 70 |
| 71 | 72 | 73 | 74 | 75 | 76 | 77 | 78 | 79 | 80 |
| 81 | 82 | 83 | 84 | 85 | 86 | 87 | 88 | 89 | 90 |
| 91 | 92 | 93 | 94 | 95 | 96 | 97 | 98 | 99 | 100 |

